



ST NICHOLAS COLLEGE
RABAT MIDDLE SCHOOL
HALF YEARLY EXAMINATIONS
February 2017

CCP

Year **7**

MATHEMATICS

TIME: **30 minutes**

Name: _____ Class: _____ Register Number: _____

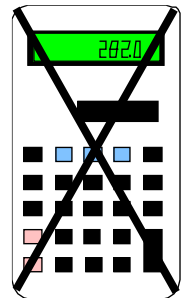
Non Calculator Paper

Question	1	2	3	4	5	6	7	NC
Mark								

DO NOT WRITE ABOVE THIS LINE

Instructions to Candidates

- **Answer all questions.**
- **This paper carries a total of 25 marks.**
- **Calculators and protractors are NOT ALLOWED.**



1. a) Put the numbers in order **smallest first**:

18, 81, 8, 28, 82

Ans: _____

b) Circle the **even** numbers:

3, 6, 12, 34, 37, 41

(6 marks)

2. Fill in:


a) 4, 8, 12, _____

b) 45, 40, 35, _____


c) 29, 39, 49, _____

(3 marks)

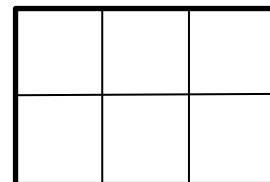
3. a) Shade $\frac{1}{2}$



Shade $\frac{3}{4}$



Shade $\frac{3}{6}$



b) Fill in: $\frac{1}{2} = \frac{3}{\square}$

(4 marks)

4. Fill in:

a) $\boxed{9} \longrightarrow \textcircled{+5} \longrightarrow \boxed{}$

b) $\boxed{9} \longrightarrow \textcircled{-5} \longrightarrow \boxed{}$

c) $\boxed{10} \longrightarrow \textcircled{\times 6} \longrightarrow \boxed{}$

(3 marks)

5. Work out:

$$\begin{array}{r} 31 \\ + 29 \\ \hline \end{array}$$

$$\begin{array}{r} 76 \\ - 52 \\ \hline \end{array}$$

(4 marks)

6. How much money do I have?



Ans: _____ cents

(3 marks)

7.



10 cats



7 dogs

a) How many pets **altogether**?

Ans: _____

b) How **many more** cats than dogs?

Ans: _____

(2 marks)

END OF NON-CALCULATOR PAPER
