


Name: \_\_\_\_\_

## Area of a Circle

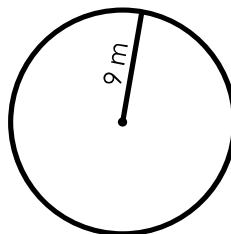
Find the area of each circle. Use 3.14 for pi. Show your work.

a.



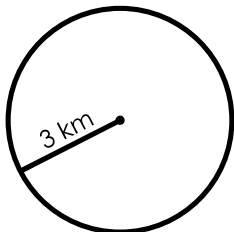
\_\_\_\_\_

b.



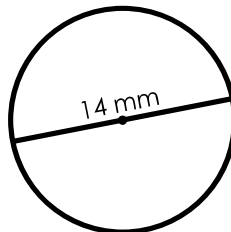
\_\_\_\_\_

c.



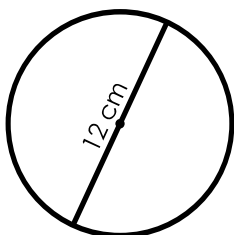
\_\_\_\_\_

d.




\_\_\_\_\_

e.



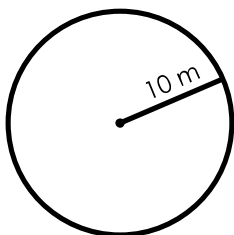
\_\_\_\_\_

f.



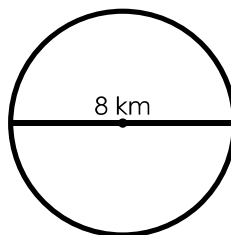
\_\_\_\_\_

g.



\_\_\_\_\_

h.



\_\_\_\_\_