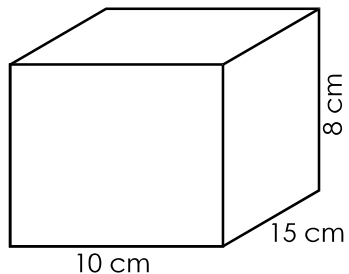


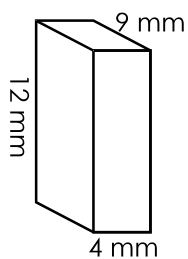
Name: \_\_\_\_\_

## Surface Area

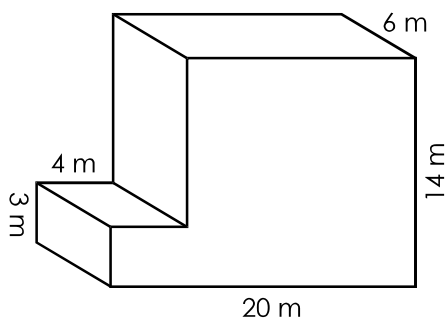
Find the surface area of the following figures.



surface area = \_\_\_\_\_



surface area = \_\_\_\_\_



surface area = \_\_\_\_\_

Work Space