


Name: _____

Surface Area

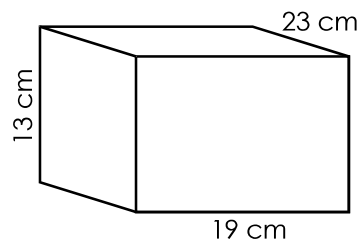
Find the surface area of the following figures.

a.



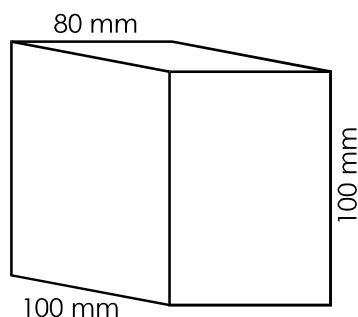
surface area = _____

b.



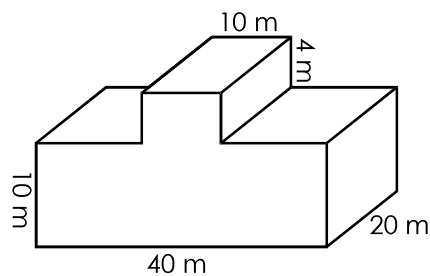
surface area = _____

c.



surface area = _____

d.



surface area = _____

- e. A bar of soap has the following measurements: 25 mm x 34 mm x 10 mm. What is the total surface area of the bar of soap?

surface area = _____

- f. The measurements for a television are 120 cm wide, 68 cm high, and 14 cm deep. What is the total surface area of the television?

surface area = _____